

Name: \_\_\_\_\_ Date: \_\_\_\_\_

**DELEGATED BEHIND THE WHEEL TRAINER**  
**SKILLS LEVEL TWO TEST # 2**  
**Precision Training in Vehicle Movement and Driving Fundamentals**  
**Precision Turning**

If needed use other side of sheet to finish answering the questions.

1. Explain or describe the following terms:

Imaginary Line \_\_\_\_\_

\_\_\_\_\_

\_\_\_\_\_

Turning Zone \_\_\_\_\_

\_\_\_\_\_

\_\_\_\_\_

Turning Range \_\_\_\_\_

\_\_\_\_\_

\_\_\_\_\_

Ground Reference \_\_\_\_\_

\_\_\_\_\_

\_\_\_\_\_

2. List 5 fixed problem objects that a trainee may encounter on a turn:

a. \_\_\_\_\_

b. \_\_\_\_\_

c. \_\_\_\_\_

d. \_\_\_\_\_

e. \_\_\_\_\_

3. List 3 movable problem objects that may be located within a turn:

- a. \_\_\_\_\_
- b. \_\_\_\_\_
- c. \_\_\_\_\_

4. Explain the difference between a sharp and a rounded right turn:

---

---

---

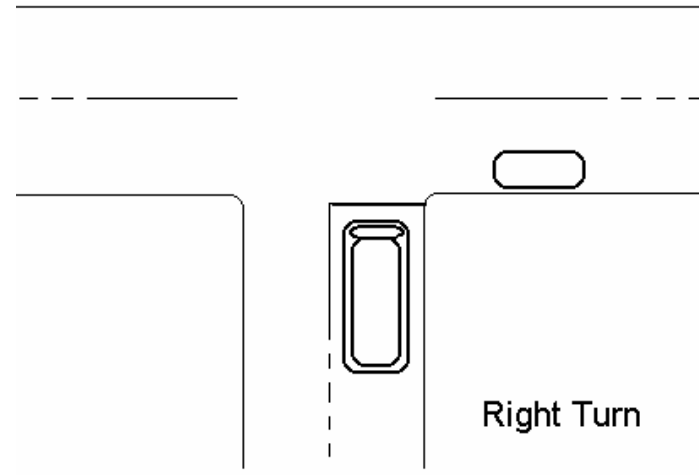
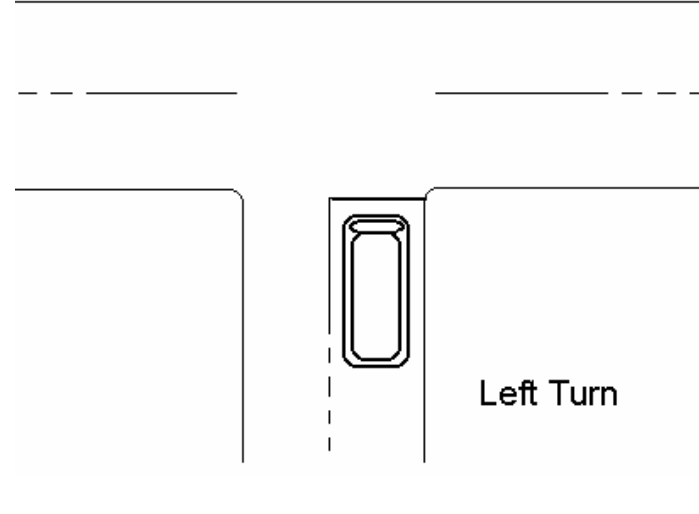
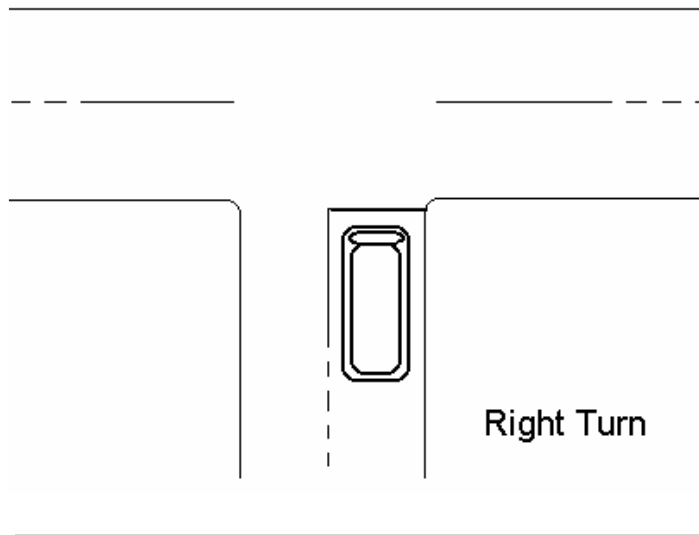
5. Number the correct order of the five count mirror procedure for a right turn:

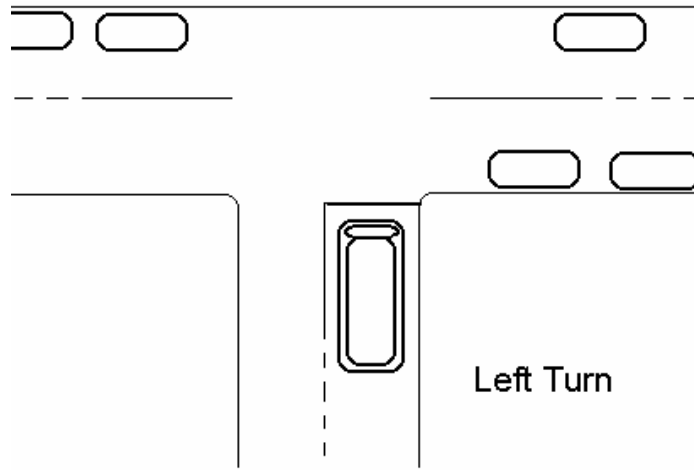
- \_\_\_\_\_ Left Mirror Zone
- \_\_\_\_\_ Front Mirror Zone
- \_\_\_\_\_ Right Mirror Zone
- \_\_\_\_\_ Repeat use of all mirrors continually.
- \_\_\_\_\_ Interior Mirror Zone
- \_\_\_\_\_ Right Mirror Zone

6. Number the correct order of the five count mirror procedure for a left turn:

- \_\_\_\_\_ Left Mirror Zone
- \_\_\_\_\_ Front Mirror Zone
- \_\_\_\_\_ Right Mirror Zone
- \_\_\_\_\_ Repeat use of all mirrors continually.
- \_\_\_\_\_ Interior Mirror Zone
- \_\_\_\_\_ Left Mirror Zone

7. Indicate the location of the ground reference and draw where the imaginary line would be for each of these turns:





8. During the turning lesson and to help identify the correct turning point, you should miss the closest problem object by no less than \_\_\_\_\_ inches and no more than \_\_\_\_\_ inches.
9. During the turning lesson and to help identify the correct turning point, you would have the trainee align the vehicle parallel to the roadway and between \_\_\_\_\_ inches and \_\_\_\_\_ inches from the edge of the roadway.
10. List 3 of the 6 objectives for skills level 2 Precision Turning:

---

---

---